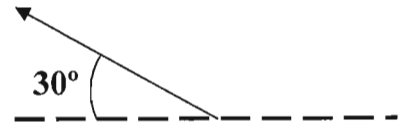


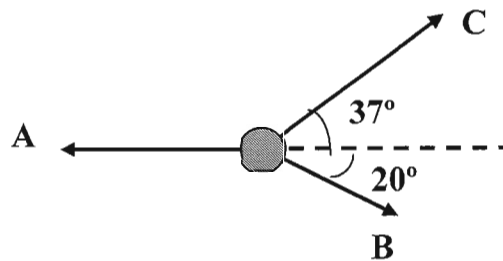
Name _____ Date Due _____

1. Decompose (find the vertical and horizontal components) a force vector which has a magnitude of 450N and is directed at an angle of 30 degrees relative to the left horizontal (see figure at right).



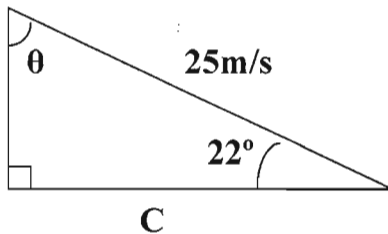
2. Find the magnitude and direction of the resultant force, given the vertical component of a force vector is 580N and the horizontal component is 200N.

3. Determine the force required through A (see figure below) for the system to remain in static equilibrium in the horizontally (i.e., not moving side to side). The forces at B and C are 40N and 90N, respectively.



4. Find the horizontal (F_x) and vertical (F_y) components of a vector with magnitude 320N directed 110 degrees counter-clockwise from the right horizontal. Draw the vector and its perpendicular components in the correct perspective.

5. Find the measure of angle θ and the length of C in the triangle below.



6. Determine the force required in A and B in the figure at right to hold steady the 100kg load pictured? Hint: The vertical components of A and B combined will hold the load.

